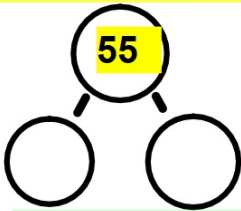


Early Bird

Complete the number patterns:

6	8	10	12				
0	5	10					
12	15	18	21				

Partition this number into different combinations:



Complete the missing number:

$$21 + \underline{\quad} = 71$$

$$\underline{\quad} + 11 = 20$$

$$5 \times 3 =$$

$$7 \times 3 =$$

$$10 \times 3 =$$

Complete these calculations:

$$15 + 40 =$$

$$63 + 8 =$$

$$14 + 40 =$$

$$77 + 8 =$$

What time is it?



Describe the turn the object has made:



Compare these numbers:

$$11 \quad \underline{\quad} \quad 21$$

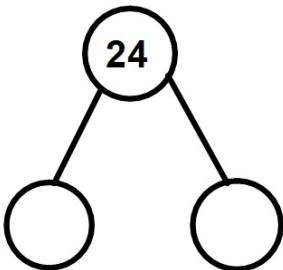
$$22 \quad \underline{\quad} \quad 10 + 10$$

Early Bird

Complete the number patterns:

2	4			10			
25		35				55	
			60	50		30	

Partition this number into different combinations:



Complete the missing number:

$$71 + \underline{\quad} = 81$$

$$\underline{\quad} + 12 = 20$$

$$6 \times 3$$

$$2 \times 3$$

$$9 \times 3$$

Complete these calculations:

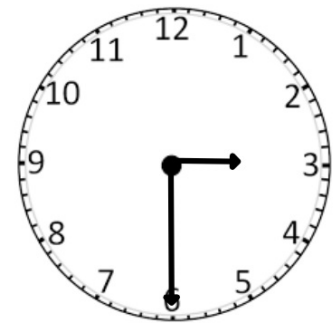
$$22 + 30 =$$

$$73 + 6 =$$

$$35 + 30 =$$

$$78 + 6 =$$

What time is it?



Describe the turn the object has made:



Compare these numbers:

$$22 \underline{\quad} 13$$

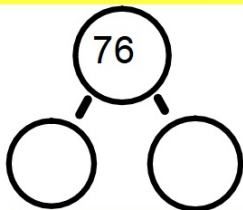
$$78 \underline{\quad} 70 + 5$$

Early Bird

Complete the number patterns:

6	8	10	12				
25	30	35					
21	24	27					

Partition this number into different combinations:



Complete the missing number:

$$37 + \underline{\quad} = 77$$

$$\underline{\quad} + 10 = 20$$

$$5 \times 5 =$$

$$4 \times 5 =$$

$$3 \times 5 =$$

Complete these calculations:


$$70 + 40 =$$

$$44 + 1 =$$


$$33 + 40 =$$

$$55 + 9 =$$

What time is it?



Describe the turn the object has made:



Compare these numbers:

$$15 \underline{\quad} 5$$

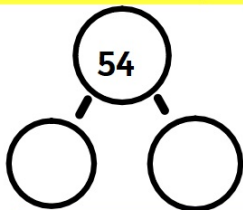
$$11 \underline{\quad} 10 + 1$$

Early Bird

Complete the number patterns:

8	10			16			
25		35				55	
			64	54		34	

Partition this number into different combinations:



Complete the missing number:

$$10 + \underline{\quad} = 14$$


$$\underline{\quad} + 5 = 20$$

$$3 \times 3 =$$

$$2 \times 3 =$$

$$7 \times 3 =$$

What time is it?



Describe the turn the object has made:



Complete these calculations:

$$20 + 30 =$$

$$40 + 4 =$$

$$25 + 90 =$$


$$29 + 6 =$$

Compare these numbers:

$$1 \underline{\quad} 10 - 9$$

$$13 \underline{\quad} 6 + 6$$

What time is it?

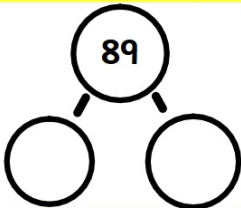


Early Bird

Complete the number patterns:

12	14	16					
65	70	75					
21	24	27					

Partition this number into different combinations:



Complete the missing number:

$$51 + \underline{\quad} = 71$$

$$\underline{\quad} + 12 = 20$$

$$6 \times 10 =$$

$$10 \times 10 =$$

$$12 \times 10 =$$

Describe the turn the object has made:



Complete these calculations:

$$20 + 30 =$$

$$56 + 8 =$$

$$25 + 55 =$$

$$13 + 8 =$$

Compare these numbers:

$$19 \quad \underline{\quad} \quad 9$$

$$11 \quad \underline{\quad} \quad 10 + 1$$